

37. The device which provides display to users, is:

- A. CPU
- B. Printer
- C. Memory Unit
- D. Monitor ✓

38. Operating system is _____ software.

- A. Application ✓
- B. System
- C. Firmware
- D. Package

39. Computer program consists of:

- A. Instructions
- B. Data
- C. Low level Language
- D. Codes
- E. Both A and B ✓

40. What is the function of "Save as" in Microsoft office?

- A. It only saves the data
- B. It saves the data without showing the file name
- C. It asks the file name and stores data in the desired location ✓
- D. It only specifies the location of the file
- E. It stores one file in various locations

37. The device which provides display to users, is:

- A. CPU
- B. Printer
- C. Memory Unit
- D. Monitor ✓

38. Operating system is _____ software.

- A. Application ✓
- B. System
- C. Firmware
- D. Package

39. Computer program consists of:

- A. Instructions
- B. Data
- C. Low level Language
- D. Codes
- E. Both A and B ✓

40. What is the function of "Save as" in Microsoft office?

- A. It only saves the data
- B. It saves the data without showing the file name
- C. It asks the file name and stores data in the desired location ✓
- D. It only specifies the location of the file
- E. It stores one file in various locations

PAKISTAN STUDIES

41. In 1930, Allama Iqbal presented Two-Nations theory in:

- A. Delhi
- B. Allahabad ✓
- C. Dhaka
- D. Lahore

42. Name the first president of Pakistan:

- A. Liaqat Ali Khan
- B. Quaid-e-Azam Muhammad Ali Jinnah
- C. Mohammad Ali Bogra
- D. Iskandar Mirza ✓

43. Pakistan got its first constitution in:

- A. 1973
- B. 1956 ✓
- C. 1962
- D. 1949

44. When did Sir Syed establish Anglo-Oriental College?

- A. 1873
- B. 1875 ✓
- C. 1877 ✓
- D. 1879

45. In 1927 Jinnah called a conference of all Muslim leaders. The conference resulted in several demands known as

- A. Lucknow Pact
- B. Nehru Report
- C. Fourteen points ✓
- D. Delhi Proposals
- E. Round Table Conference

46. The conflict over water was especially related to which of the following?

- A. Bari-Doab Canal ✓
- B. Chenab
- C. Turbella Canal
- D. Hunza Spill way
- E. Jehlum

47. Who was the 3rd Governor General of Pakistan?

- A. Sikandar Mirza
- B. Liaquat Ali Khan ✓
- C. Khwaja Nizamuddin
- D. Ghulam Muhammad

48. Which is the most populated city of Sindh?

- A. Karachi ✓
- B. Hyderabad
- C. Larkana
- D. Sakhar
- E. Sibbi

49. Pakistan received only _____ industrial units out of 921 units in united India.

- A. 32 ✓
- B. 34
- C. 36
- D. 38
- E. 40

50. In mountainous areas of Pakistan, people make their living through agriculture and:

- A. Poultry farming
- B. Fisheries
- C. Mining
- D. Tourism ✓

ISLAMIYAT

51. The Tasbeeh of Subhana Rabi-al-Azeem is recited in:

- A. Sajda
- B. Rakuh ✓
- C. Qa'ada
- D. All of the above

52. Who was the First Caliph of Islamic State?

- A. Hazrat Usman (R.A)
- B. Hazrat Ali (R.A)
- C. Hazrat Umar (R.A)
- D. Hazrat Abu Bakar (R.A)

53. The longest Surah in the Holy Quran is:

- A. Surah Al Falaq
- B. Surah Al Nass
- C. Surah Al Imran
- D. Surah Al Baqra

54. On which place, first Wahi was descended.

- A. Sore Cave
- B. Hira Cave
- C. Khana-e-Ka'aba
- D. None of the above

55. In which surrah bismillah has occurred twice?

- A. Namal
- B. Al Tauba
- C. Al Nas
- D. Al Noor

ISLAMIYAT

51. The Tasbeeh of Subhana Rabi-al-Azeem is recited in:

- A. Sajda
- B. Rakuh ✓
- C. Qa'ada
- D. All of the above

52. Who was the First Caliph of Islamic State?

- A. Hazrat Usman (R.A)
- B. Hazrat Ali (R.A)
- C. Hazrat Umar (R.A)
- D. Hazrat Abu Bakar (R.A)

53. The longest Surah in the Holy Quran is:

- A. Surah Al Falaq
- B. Surah Al Nass
- C. Surah Al Imran
- D. Surah Al Baqra

54. On which place, first Wahi was descended.

- A. Sore Cave
- B. Hira Cave
- C. Khana-e-Ka'aba
- D. None of the above

55. In which surrah bismillah has occurred twice?

- A. Namal
- B. Al Tauba
- C. Al Nas
- D. Al Noor

72. Which of the following country was hit by Mother Of All Bombs (MOAB) in April 2017?

- A. Iraq
- B. Syria
- C. Afghanistan
- D. North Korea

73. People of turkey voted for _____ in referendum in April, 2017.

- A. Presidential form of Government
- B. Parliamentary form of Government
- C. Dictatorship
- D. Technocrat Government

74. The person who inhale smoke of cigarette indirectly is known as:

- A. Lazy smoker
- B. Inactive smoker
- C. Inert smoker
- D. Passive smoker

75. When moon seems to be getting big that moon is called:

- A. Quarter moon
- B. Waning moon
- C. Full moon
- D. Waxing moon

76. All those reactions which release heat are called:

- A. Endothermic reaction
- B. Exothermic reaction
- C. Condensation reaction
- D. Oxidation reaction

77. When meteors enter in earth it burns with light due to _____.

- A. Earth has more temperature
- B. Air present between space and earth
- C. Friction produce by rapid motion
- D. Friction produce between meteors and earth

72. Which of the following country was hit by Mother Of All Bombs (MOAB) in April 2017?

- A. Iraq
- B. Syria
- C. Afghanistan
- D. North Korea

73. People of turkey voted for _____ in referendum in April, 2017.

- A. Presidential form of Government
- B. Parliamentary form of Government
- C. Dictatorship
- D. Technocrat Government

74. The person who inhale smoke of cigarette indirectly is known as:

- A. Lazy smoker
- B. Inactive smoker
- C. Inert smoker
- D. Passive smoker

75. When moon seems to be getting big that moon is called:

- A. Quarter moon
- B. Waning moon
- C. Full moon
- D. Waxing moon

76. All those reactions which release heat are called:

- A. Endothermic reaction
- B. Exothermic reaction
- C. Condensation reaction
- D. Oxidation reaction

77. When meteors enter in earth it burns with light due to _____.

- A. Earth has more temperature
- B. Air present between space and earth
- C. Friction produce by rapid motion
- D. Friction produce between meteors and earth

MATHEMATICS

56. What is the smallest integer divisible by both 25 and 30?

- A. 60
- B. 150
- C. 120
- D. 125
- E. 190

57. A prize of Rs.240 is divided between two persons. If one person receives Rs.180, then what is the difference between the amounts received by the two persons?

- A. Rs.30
- B. Rs.60
- C. Rs.120
- D. Rs.210
- E. Rs.420

58. Find the radius of a circle whose circumference is 308 m?

- A. 49 m
- B. 51 m
- C. 90 m
- D. 35 m
- E. 40 m

59. Simplify: $(2x - 3) - [(4x + 7) - (5x - 2)]$

- A. $3x - 12$
- B. $-3x - 12$
- C. $2x + 12$
- D. $-2x + 12$
- E. x

60. A man spent $\frac{3}{5}$ of his savings and was still left with Rs 2,000. What were his initial savings?

- A. Rs.4000
- B. Rs.5000
- C. Rs.6000
- D. Rs.7000

MATHEMATICS

56. What is the smallest integer divisible by both 25 and 30?

- A. 60
- B. 150 ✓
- C. 120
- D. 125
- E. 190

57. A prize of Rs.240 is divided between two persons. If one person receives Rs.180, then what is the difference between the amounts received by the two persons?

- A. Rs.30
- B. Rs.60
- C. Rs.120 ✓
- D. Rs.210
- E. Rs.420

58. Find the radius of a circle whose circumference is 308 m?

- A. 49 m ✓
- B. 51 m
- C. 90 m
- D. 35 m
- E. 40 m

59. Simplify: $(2x - 3) - [(4x + 7) - (5x - 2)]$

- A. $3x - 12$ ✓
- B. $-3x - 12$
- C. $2x + 12$
- D. $-2x + 12$
- E. x

60. A man spent $\frac{3}{5}$ of his savings and was still left with Rs 2,000. What were his initial savings?

- A. Rs.4000
- B. Rs.5000
- C. Rs.6000
- D. Rs.7000

72. Which of the following country was hit by Mother Of All Bombs (MOAB) in April 2017?

- A. Iraq
- B. Syria
- C. Afghanistan
- D. North Korea

73. People of turkey voted for _____ in referendum in April, 2017.

- A. Presidential form of Government
- B. Parliamentary form of Government
- C. Dictatorship
- D. Technocrat Government

74. The person who inhale smoke of cigarette indirectly is known as:

- A. Lazy smoker
- B. Inactive smoker
- C. Inert smoker
- D. Passive smoker

75. When moon seems to be getting big that moon is called:

- A. Quarter moon
- B. Waning moon
- C. Full moon
- D. Waxing moon

76. All those reactions which release heat are called:

- A. Endothermic reaction
- B. Exothermic reaction
- C. Condensation reaction
- D. Oxidation reaction

77. When meteors enter in earth it burns with light due to _____.

- A. Earth has more temperature
- B. Air present between space and earth
- C. Friction produce by rapid motion
- D. Friction produce between meteors and earth

72. Which of the following country was hit by Mother Of All Bombs (MOAB) in April 2017?

- A. Iraq
- B. Syria
- C. Afghanistan
- D. North Korea

73. People of turkey voted for _____ in referendum in April, 2017.

- A. Presidential form of Government
- B. Parliamentary form of Government
- C. Dictatorship
- D. Technocrat Government

74. The person who inhale smoke of cigarette indirectly is known as:

- A. Lazy smoker
- B. Inactive smoker
- C. Inert smoker
- D. Passive smoker

75. When moon seems to be getting big that moon is called:

- A. Quarter moon
- B. Waning moon
- C. Full moon
- D. Waxing moon

76. All those reactions which release heat are called:

- A. Endothermic reaction
- B. Exothermic reaction
- C. Condensation reaction
- D. Oxidation reaction

77. When meteors enter in earth it burns with light due to _____.

- A. Earth has more temperature
- B. Air present between space and earth
- C. Friction produce by rapid motion
- D. Friction produce between meteors and earth

78. Which one of the following action is involuntary?

- A. Walking
- B. Talking
- C. Running
- D. Pumping of blood

79. _____ is the path through which electric current passes.

- A. Electric change
- B. Electric route
- C. Electric circuit
- D. Electric arc

80. _____ is the smallest particle of matter.

- A. Molecule
- B. Atom
- C. Compound
- D. Free radical

78. Which one of the following action is involuntary?

- A. Walking
- B. Talking
- C. Running
- D. Pumping of blood

79. _____ is the path through which electric current passes.

- A. Electric change
- B. Electric route
- C. Electric circuit
- D. Electric arc

80. _____ is the smallest particle of matter.

- A. Molecule
- B. Atom
- C. Compound
- D. Free radical

TRANSLATION (10 MARKS)

81. Translate the following paragraph into English:

لوگ امتحان کے نام سے گھبراتے ہیں لیکن مجھے ان کے گھبراتے پر ہنسی آتی ہے۔ آخر امتحان ایسا کیا ہوتا ہے؟ دوہی صورتیں: "فیل یا پاس"۔ اس سال کامیاب نہ ہوئے، آئندہ سال سہی۔ میں اپنے دوستوں اور ہم جماعتوں کو دیکھتا تھا کہ جوں جوں امتحان کے دن قریب آتے جاتے ان کے حواس اور ان کا دماغ ماؤف ہونے لگتے۔ بندے پر امتحان کا نہ رتی برابر اثر پہلے تھا اور نہ اب بھی اس کے ختم ہوجانے کا افسوس ہے۔ امیدواروں کا مجمع۔ نئی نئی صورتیں، عجیب عجیب خیالات، یہ ایسی چیزیں ہیں جن سے کبھی دل سیر نہیں ہوسکتا۔ جی چاہتا ہے کہ تمام عمر امتحان ہونے جائے، لیکن پڑھنے اور یاد کرنے کی شرط اٹھا دی جائے۔

TRANSLATION (10 MARKS)

81. Translate the following paragraph into English:

لوگ امتحان کے نام سے گھبراتے ہیں لیکن مجھے ان کے گھبراتے پر ہنسی آتی ہے۔ آخر امتحان ایسا کیا ہوتا ہے؟ دوہی صورتیں: "فیل یا پاس"۔ اس سال کامیاب نہ ہوئے، آئندہ سال سہی۔ میں اپنے دوستوں اور ہم جماعتوں کو دیکھتا تھا کہ جوں جوں امتحان کے دن قریب آتے جاتے ان کے حواس اور ان کا دماغ ماؤف ہونے لگتے۔ بندے پر امتحان کا نہ رتی برابر اثر پہلے تھا اور نہ اب بھی اس کے ختم ہوجانے کا افسوس ہے۔ امیدواروں کا مجمع۔ نئی نئی صورتیں، عجیب عجیب خیالات، یہ ایسی چیزیں ہیں جن سے کبھی دل سیر نہیں ہوسکتا۔ جی چاہتا ہے کہ تمام عمر امتحان ہونے جائے، لیکن پڑھنے اور یاد کرنے کی شرط اٹھا دی جائے۔

ESSAY WRITING (10 MARKS)

82. Organize, develop and express your ideas on the following topic. (250-300 words)

"The powers and responsibilities of the youth"

F-17-1614-0000 (AS-11)-PINK-081017

ESSAY WRITING (10 MARKS)

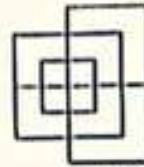
82. Organize, develop and express your ideas on the following topic. (250-300 words)

"The powers and responsibilities of the youth"

F-17-1614-0000 (AS-11)-PINK-081017

GD (BS-11) 2022 Intelligence Bureau Batch 2

- What is the most popular system of shorthand writing?
(A) Sloan Duployan System
(B) Pitman's Shorthand
(C) John Robert Gregg's System
(D) Morse Code
 - What should be the length of a stroke?
(A) Half of an inch (B) $1/3^{\text{rd}}$ of an inch
(C) $1/4^{\text{th}}$ of an inch (D) $1/6^{\text{th}}$ of an inch
 - Which strokes are never written upward?
(A) Light strokes (B) Thick strokes
(C) CH (D) Ar
 - What is an intervening vowel?
(A) Vowel occurring before a stroke
(B) Vowel occurring at the end of a stroke
(C) Vowel occurring between any two strokes
(D) Vowel occurring between two curved strokes
 - Where is a third-place intervening written?
(A) Before the second stroke at the end
(B) After the first stroke at the end
(C) After the second stroke at the end
(D) After the first stroke at the beginning
 - The symbol "*" is used for:
(A) Special (B) Important
(C) Notable (when added to a word or phrase)
(D) All of the above
 - The term "19thC or 19C" is used for:
(A) 19th Century (B) Any Century
(C) Both of the above (D) None of the above
 - Which currency represents this symbol (£)?
(A) American Dollar (B) Pound Sterling
(C) Singapore Dollar (D) Chinese Currency
 - What is the roman letter for 50?
(A) XXXXX (B) XXXXL
(C) CX (D) L
- Solution:**
Natural numbers Corresponding roman no
- | | |
|------|---|
| 1 | I |
| 5 | V |
| 10 | X |
| 50 | L |
| 100 | C |
| 500 | D |
| 1000 | M |
- So, Roman letter for 50 is L.
- Find the minimum number of straight lines required to make the given figure.



- (A) 13 (B) 15
(C) 17 (D) 19

- Find the number of triangles in the given figure.



- (A) 11 (B) 13
(C) 15 (D) 17

- Choose the alternative which is closely resembles the mirror image of the given combination.

MALAYALAM
(1) MALAYALAM (2) MAJAYAJAM
(3) WWTYAVYVW (4) MAFAYAFAM

- (A) 1 (B) 2
(C) 3 (D) 4

- Choose the correct mirror image of the given figure (X) from the amongst the four alternatives.



- (X) (1) (2) (3) (4)

- (A) 1 (B) 2
(C) 3 (D) 4

Option D is correct.

- If A + B means A is the brother of B; A - B means A is the sister of B and A x B means A is the father of B. Which of the following means that C is the son of M?
(A) M - N x C + F (B) F - C + N x M
(C) N + M - F x C (D) M x N - C + F
- Introducing a boy, a girl said, "He is the son of the daughter of the father of my uncle." How is the boy related to the girl?
(A) Brother (B) Nephew
(C) Uncle (D) Son in Law

Solution:

The father of the girl's uncle is the grandfather of

the girl and daughter of the grandfather is sister of her father.

So, daughter of the grandfather is her aunt.
Aunt's son is brother of the girl.

Hence, option A is correct.

16. Pointing a photograph X said to his friend Y, "She is the only daughter of the father of my mother." How X is related to the person of photograph?
(A) Daughter (B) Son
(C) Nephew (D) None of these

Solution:

X said to his friend Y, "She is the only daughter of the father of my mother."

'The only daughter of the father of X's mother' means the mother of X.

Hence, X is the child of the lady in the photograph. He is the son.

Hence, the answer is son. So option B is correct.

17. If $A + B$ means A is the brother of B; $A \times B$ means A is the son of B; and $A \% B$ means B is the daughter of A then which of the following means M is the maternal uncle of N?
(A) $M + O \times N$ (B) $M / O \times N + P$
(C) $M + O / N$ (D) None of these

18. If D is the brother of B, how B is related to C?
To answer this question which of the statements is/are necessary?
A. The son of D is the grandson of C.
B. B is the sister of D.
(A) Only 1
(B) Only 2
(C) Either 1 or 2
(D) 1 and 2 both are required

Solution:

Given: D is the brother of B.

From statement 1, we can detect that D is son of C (son of D is the grandson of C).

From statement 2, we can detect that B is 'Female' (sister of D).

Therefore, B is the daughter of C.

So, option D is correct.

19. Eiffel Tower is located in which country?
(A) Norway (B) France
(C) Belgium (D) India
20. Famous book; Al-Qanun was written by which Muslim scientist?
(A) Jabar bin Hayyan
(B) Zakariya Al-Razi
(C) Bu Ali Sina
(D) Abdul Qasim Majreedi
21. What is the world's largest living mammal?
(A) Elephant (B) Blue Whale
(C) Shark (D) Giraffe
22. What is the currency of Turkey?
(A) Lira (B) Penny
(C) Euro (D) Dollar
23. Manchhar lake is situated in District:

- (A) Swat (B) Dadu
(C) Muzaffarabad (D) Gilgit

24. 8th March is observed internationally as?
(A) Women's Day (B) Father's Day
(C) World Health Day (D) Human Rights Day
25. Terbeli Dam is located in _____ district.
(A) Hafizabad (B) Jhelum
(C) Mirpur (D) Swabi
26. The National anthem of Pakistan is written by:
(A) Zafar Ali Khan (B) Allama Iqbal
(C) Hafiz Jalandhri (D) Faiz Ahmad Faiz
27. Who founded Aligarh Muslim School?
(A) Sir Sayyid (B) Quaid-e-Azam
(C) Allama Iqbal (D) Liaqat Ali Khan
28. Prophet (PBUH) recited _____ at the conquest of Makkah.
(A) Surah Al-Falah (B) Surah Al-Kausar
(C) Surah Al-Anfal (D) Surah Al-Ankaboot
29. _____ Muslims fought in the Ghazwa-e-Badr?
(A) 313 (B) 314
(C) 315 (D) 318
30. In Holy Quran _____ Surahs are named after the names of Prophets.
(A) 5 (B) 6
(C) 7 (D) 8
31. Choose the word that is spelled correctly?
(A) Apprenticeship (B) Aprenticeship
(C) Apprentiseship (D) Apperenticeship
32. Choose the word that is spelled correctly?
(A) Brigadier (B) Brigidier
(C) Bregadeir (D) Bragedier
33. Choose the word that is spelled correctly?
(A) Magistrate (B) Magisterate
(C) Magisturate (D) Maggable
34. Choose the word that is spelled correctly?
(A) Parliamentarian (B) Parfementarian
(C) Parfementarian (D) Parliamentarian
35. Correct to indirect: She said "Stop staring at me."
(A) She told him to stop staring at him
(B) She told him to stop staring at me
(C) She told him to stop staring at her
(D) She told him to stopped staring at her
36. Convert to indirect form: She asked him "Are you crazy?"
(A) She asked him if she was crazy
(B) She asked him if he was crazy
(C) She asked him if he is crazy
(D) She asked him that if he was crazy
37. Convert to indirect form: she said, "Go upstairs?"
(A) She told me to go upstairs
(B) She said me to upstairs
(C) She told me that go upstairs
(D) She told me to went upstairs
38. Change into Passive Voice: The dealer has

the girl and daughter of the grandfather is sister of her father.

So, daughter of the grandfather is her aunt.

Aunt's son is brother of the girl.

Hence, option A is correct.

16. Pointing a photograph X said to his friend Y, "She is the only daughter of the father of my mother." How X is related to the person of photograph?

(A) Daughter (B) Son
(C) Nephew (D) None of these

Solution:

X said to his friend Y, "She is the only daughter of the father of my mother."

'The only daughter of the father of X's mother' means the mother of X.

Hence, X is the child of the lady in the photograph. He is the son.

Hence, the answer is son. So option B is correct.

17. If $A + B$ means A is the brother of B; $A \times B$ means A is the son of B; and $A \% B$ means B is the daughter of A then which of the following means M is the maternal uncle of N?

(A) $M + O \times N$ (B) $M / O \times N + P$
(C) $M + O / N$ (D) None of these

18. If D is the brother of B, how B is related to C? To answer this question which of the statements is/are necessary?

A. The son of D is the grandson of C.

B. B is the sister of D.

(A) Only 1
(B) Only 2
(C) Either 1 or 2
(D) 1 and 2 both are required

Solution:

Given: D is the brother of B.

From statement 1, we can detect that D is son of C (son of D is the grandson of C).

From statement 2, we can detect that B is 'Female' (sister of D).

Therefore, B is the daughter of C.

So, option D is correct.

19. Eiffel Tower is located in which country?

(A) Norway (B) France
(C) Belgium (D) India

20. Famous book; Al-Qanun was written by which Muslim scientist?

(A) Jabar bin Hayyan
(B) Zakariya Al-Razi
(C) Bu Ali Sina
(D) Abdul Qasim Majreedi

21. What is the world's largest living mammal?

(A) Elephant (B) Blue Whale
(C) Shark (D) Giraffe

22. What is the currency of Turkey?

(A) Lira (B) Penny
(C) Euro (D) Dollar

23. Manchhar lake is situated in District:

(A) Swat (B) Dadu
(C) Muzaffarabad (D) Gilgit

24. 8th March is observed internationally as?

(A) Women's Day (B) Father's Day
(C) World Health Day (D) Human Rights Day

25. Terbeli Dam is located in _____ district.

(A) Hafizabad (B) Jhelum
(C) Mirpur (D) Swabi

26. The National anthem of Pakistan is written by:

(A) Zafar Ali Khan (B) Allama Iqbal
(C) Hafiz Jalandhri (D) Faiz Ahmad Faiz

27. Who founded Aligarh Muslim School?

(A) Sir Sayyid (B) Quaid-e-Azam
(C) Allama Iqbal (D) Liaquat Ali Khan

28. Prophet (PBUH) recited _____ at the conquest of Makkah.

(A) Surah Al-Falah (B) Surah Al-Kausar
(C) Surah Al-Anfal (D) Surah Al-Ankaboot

29. _____ Muslims fought in the Ghazwa-e-Badr?

(A) 313 (B) 314
(C) 315 (D) 318

30. In Holy Quran _____ Surahs are named after the names of Prophets.

(A) 5 (B) 6
(C) 7 (D) 8

31. Choose the word that is spelled correctly?

(A) Apprenticeship (B) Aprenticeship
(C) Apprentiseship (D) Apperenticeship

32. Choose the word that is spelled correctly?

(A) Brigadier (B) Brigidier
(C) Bregadeir (D) Bragedier

33. Choose the word that is spelled correctly?

(A) Magistrate (B) Magisterate
(C) Magisturate (D) Maggable

34. Choose the word that is spelled correctly?

(A) Parliamentarian (B) Parfementarian
(C) Parfementarian (D) Parliamentarian

35. Correct to indirect: She said "Stop staring at me."

(A) She told him to stop staring at him
(B) She told him to stop staring at me
(C) She told him to stop staring at her
(D) She told him to stopped staring at her

36. Convert to indirect form: She asked him "Are you crazy?"

(A) She asked him if she was crazy
(B) She asked him if he was crazy
(C) She asked him if he is crazy
(D) She asked him that if he was crazy

37. Convert to indirect form: she said, "Go upstairs?"

(A) She told me to go upstairs
(B) She said me to upstairs
(C) She told me that go upstairs
(D) She told me to went upstairs

38. Change into Passive Voice: The dealer has

- sold the car?
 (A) The car have been sold by the dealer
 (B) The selling has been done by the dealer of the car
 (C) The car has been sold by the dealer
 (D) None of them
39. Change the Passive Voice of the following sentence: Our lives are being spent in expectation?
 (A) We used to spend our lives in expectation
 (B) We are spending our lives in expectation
 (C) We spent our lives in expectation
 (D) We spend our lives in expectations
40. Loading of operating system (OS) into computer memory is called:
 (A) Initializing (B) Booting
 (C) Processing (D) Running
41. Which one is an application software?
 (A) Windows (B) Linux
 (C) MS-Excel (D) DOS
42. What are the two kinds of main memory in computer?
 (A) Secondary and Primary
 (B) RAM and ROM
 (C) Random and Sequential
 (D) Cache and Buffers
43. Integrated Circuits (ICs) are related to which generation of computers?
 (A) First Generation
 (B) Second Generation
 (C) Third Generation
 (D) Fourth Generation
44. Which of the following is not a valid data type in MS-Excel?
 (A) Number (B) Character
 (C) Label (D) Date/Time
45. Virtual memory is typically located on
 (A) RAM (B) CPU
 (C) Flash Card (D) Hard Drive
46. Which of the following is not the part of standard office suite?
 (A) Word Processor (B) Database
 (C) Image Editor (D) File manager
47. Which of the following is not available on the Ruler of MS Word screen?
 (A) Tab stop box (B) Left Indent
 (C) Right Indent (D) Center Indent
48. What is gutter margin?
 (A) Margin that is added to the left margin when printing
 (B) Margin that is added to right margin when printing
 (C) Margin that is added to the binding side of page when printing
 (D) Margin that is added to the outside of the page when printing
49. What is the default file extension for all Word documents?
 (A) .txt (B) .word
 (C) .docs (D) .docx
50. In Word, the mailing list is known as the _____.
 (A) Data Sheet (B) Source
 (C) Data Source (D) Sheet
51. Which of the following enables you to make multiple changes in a document as once?
 (A) Find Command
 (B) Replace Command
 (C) Drag and Drop
 (D) Copy Command
52. When you save a file as a Web page, Word converts the contents of the document into _____.
 (A) Java (B) Perl
 (C) HTML (D) Unix
53. Hyperlinks can be
 (A) Text (B) Drawing objects
 (C) Pictures (D) All of above
54. How are data organized in a spreadsheet?
 (A) Lines and Spaces
 (B) Layers and Planes
 (C) Rows and Columns
 (D) Height and Width
55. Which is not the function of the operating system?
 (A) Memory management
 (B) Disk management
 (C) Virus Protection
 (D) Application management
56. Two or more computers connected to each other for sharing information form a _____.
 (A) Pipeline (B) Router
 (C) Server (D) Network
57. What is the full form of USB as used in computer related activities?
 (A) Universal Serial Bus
 (B) Ultra Serial Block
 (C) United Service Block
 (D) Universal Security Block
58. The language that the computer can understand and execute is called _____.
 (A) System program
 (B) Application software
 (C) Machine language
 (D) All of the above
59. The Device which converts instructions into the binary form that is understood by the computer and supply to the computer is known as
 (A) Memory (B) Output
 (C) Automatic (D) Input
60. How many Bytes in a Megabyte (MB)?
 (A) 1,000,000 (B) 1,024,000
 (C) 1,048,576 (D) 1,000,024

Answer Key

- | | | | | | | | |
|------|-------|-------|-------|-------|-------|-------|-------|
| 1. B | 9. D | 17. D | 25. D | 33. A | 41. C | 49. D | 57. A |
| 2. A | 10. A | 18. D | 26. C | 34. A | 42. B | 50. C | 58. C |
| 3. B | 11. C | 19. B | 27. A | 35. C | 43. C | 51. B | 59. D |
| 4. C | 12. B | 20. C | 28. A | 36. B | 44. B | 52. C | 60. B |
| 5. A | 13. D | 21. B | 29. A | 37. A | 45. D | 53. D | |
| 6. D | 14. D | 22. A | 30. B | 38. C | 46. B | 54. C | |
| 7. A | 15. A | 23. B | 31. A | 39. B | 47. D | 55. C | |
| 8. B | 16. B | 24. A | 32. A | 40. B | 48. C | 56. D | |



- sold the car?
 (A) The car have been sold by the dealer
 (B) The selling has been done by the dealer of the car
 (C) The car has been sold by the dealer
 (D) None of them
39. Change the Passive Voice of the following sentence: Our lives are being spent in expectation?
 (A) We used to spend our lives in expectation
 (B) We are spending our lives in expectation
 (C) We spent our lives in expectation
 (D) We spend our lives in expectations
40. Loading of operating system (OS) into computer memory is called:
 (A) Initializing (B) Booting
 (C) Processing (D) Running
41. Which one is an application software?
 (A) Windows (B) Linux
 (C) MS-Excel (D) DOS
42. What are the two kinds of main memory in computer?
 (A) Secondary and Primary
 (B) RAM and ROM
 (C) Random and Sequential
 (D) Cache and Buffers
43. Integrated Circuits (ICs) are related to which generation of computers?
 (A) First Generation
 (B) Second Generation
 (C) Third Generation
 (D) Fourth Generation
44. Which of the following is not a valid data type in MS-Excel?
 (A) Number (B) Character
 (C) Label (D) Date/Time
45. Virtual memory is typically located on
 (A) RAM (B) CPU
 (C) Flash Card (D) Hard Drive
46. Which of the following is not the part of standard office suite?
 (A) Word Processor (B) Database
 (C) Image Editor (D) File manager
47. Which of the following is not available on the Ruler of MS Word screen?
 (A) Tab stop box (B) Left Indent
 (C) Right Indent (D) Center Indent
48. What is gutter margin?
 (A) Margin that is added to the left margin when printing
 (B) Margin that is added to right margin when printing
 (C) Margin that is added to the binding side of page when printing
 (D) Margin that is added to the outside of the page when printing
49. What is the default file extension for all Word documents?
 (A) .txt (B) .word
 (C) .docs (D) .docx
50. In Word, the mailing list is known as the _____.
 (A) Data Sheet (B) Source
 (C) Data Source (D) Sheet
51. Which of the following enables you to make multiple changes in a document as once?
 (A) Find Command
 (B) Replace Command
 (C) Drag and Drop
 (D) Copy Command
52. When you save a file as a Web page, Word converts the contents of the document into _____.
 (A) Java (B) Perl
 (C) HTML (D) Unix
53. Hyperlinks can be
 (A) Text (B) Drawing objects
 (C) Pictures (D) All of above
54. How are data organized in a spreadsheet?
 (A) Lines and Spaces
 (B) Layers and Planes
 (C) Rows and Columns
 (D) Height and Width
55. Which is not the function of the operating system?
 (A) Memory management
 (B) Disk management
 (C) Virus Protection
 (D) Application management
56. Two or more computers connected to each other for sharing information form a _____.
 (A) Pipeline (B) Router
 (C) Server (D) Network
57. What is the full form of USB as used in computer related activities?
 (A) Universal Serial Bus
 (B) Ultra Serial Block
 (C) United Service Block
 (D) Universal Security Block
58. The language that the computer can understand and execute is called _____.
 (A) System program
 (B) Application software
 (C) Machine language
 (D) All of the above
59. The Device which converts instructions into the binary form that is understood by the computer and supply to the computer is known as
 (A) Memory (B) Output
 (C) Automatic (D) Input
60. How many Bytes in a Megabyte (MB)?
 (A) 1,000,000 (B) 1,024,000
 (C) 1,048,576 (D) 1,000,024

Answer Key

- | | | | | | | | |
|------|-------|-------|-------|-------|-------|-------|-------|
| 1. B | 9. D | 17. D | 25. D | 33. A | 41. C | 49. D | 57. A |
| 2. A | 10. A | 18. D | 26. C | 34. A | 42. B | 50. C | 58. C |
| 3. B | 11. C | 19. B | 27. A | 35. C | 43. C | 51. B | 59. D |
| 4. C | 12. B | 20. C | 28. A | 36. B | 44. B | 52. C | 60. B |
| 5. A | 13. D | 21. B | 29. A | 37. A | 45. D | 53. D | |
| 6. D | 14. D | 22. A | 30. B | 38. C | 46. B | 54. C | |
| 7. A | 15. A | 23. B | 31. A | 39. B | 47. D | 55. C | |
| 8. B | 16. B | 24. A | 32. A | 40. B | 48. C | 56. D | |



GD (BS-11) 2022 Intelligence Bureau Batch 3

1. Which shortcut key provides preview of a printed page?
(A) F2 (B) Ctrl+F4
(C) Ctrl+F2 (D) None of these
2. The process of connecting to the Internet account is
(A) SIGN IN (B) LOG OUT
(C) LOG IN (D) SIGN OUT
3. A commonly used graphic format for the web is
(A) Imp (B) bmp
(C) text (D) GIF
4. The _____ called the Web, contains billions of documents.
(A) Web Portal (B) HTTP
(C) World Wide Web (D) Domain
5. Which of the following is a Web Browser?
(A) Paint (B) PowerPoint
(C) Word (D) Firefox
6. The _____ shows all the web sites and pages that you have visited over a period of time.
(A) Status bar (B) Task bar
(C) Tool bar (D) History list
7. Which of the following refers to the memory in your computer?
(A) USB (B) DSL
(C) RAM (D) LAN
8. Which of the following holds the ROM, CPU, RAM and expansion cards?
(A) Hard disk (B) Floppy disk
(C) All of the above (D) Motherboard
9. Modem stands for
(A) A type of secondary memory
(B) Mainframe operating device memory
(C) Modulator and Demodulator
(D) All of the above
10. To turn the tables:
(A) To change completely the position of disadvantage
(B) To change the sorry scheme
(C) To opposite
(D) To defeat
11. To keep the ball rolling:
(A) To work instantly
(B) To make the best use of
(C) To keep the conversation going
(D) To earn more and more
12. The pros and cons:
(A) For and Against (B) Fresh and Stale
(C) Foul and Fair (D) Former and Latter
13. The antonym of MAMMOTH is _____?
(A) Big (B) Giant
(C) Small (D) Low
14. Antonym of ELASTIC is _____?
(A) Yielding (B) Rigid
(C) Mold-able (D) Supple
15. Antonym of PACIFIC is _____?
(A) Aggressive (B) Peaceful
(C) Hawkish (D) Discordant
16. Antonym of DWARF is _____?
(A) Giant (B) Tiny
(C) Huge (D) Enormous
17. Antonym of LABOR is _____?
(A) Amuse (B) Surrender
(C) Rest (D) Strive
18. Synonym of DELEGATE is _____?
(A) Representative (B) Officer
(C) Member (D) Servant
19. Synonym of PRECARIOUS is _____?
(A) Safe (B) Brittle
(C) Perilous (D) None of these
20. Synonym of ZEALOT is _____?
(A) Fanatic (B) Apathy
(C) Liberal (D) Impious
21. Synonym of YELL is _____?
(A) Shackle (B) Hitch
(C) Whisper (D) Shout
22. This passport is valid _____ five years.

(A) To (B) For
(C) Of (D) In

GD (BS-11) 2022
Intelligence Bureau Batch 3

1. Which shortcut key provides preview of a printed page?
(A) F2 (B) Ctrl+F4
(C) Ctrl+F2 (D) None of these
2. The process of connecting to the Internet account is
(A) SIGN IN (B) LOG OUT
(C) LOG IN (D) SIGN OUT
3. A commonly used graphic format for the web is
(A) Imp (B) bmp
(C) text (D) GIF
4. The _____ called the Web, contains billions of documents.
(A) Web Portal (B) HTTP
(C) World Wide Web (D) Domain
5. Which of the following is a Web Browser?
(A) Paint (B) PowerPoint
(C) Word (D) Firefox
6. The _____ shows all the web sites and pages that you have visited over a period of time.
(A) Status bar (B) Task bar
(C) Tool bar (D) History list
7. Which of the following refers to the memory in your computer?
(A) USB (B) DSL
(C) RAM (D) LAN
8. Which of the following holds the ROM, CPU, RAM and expansion cards?
(A) Hard disk (B) Floppy disk
(C) All of the above (D) Motherboard
9. Modem stands for
(A) A type of secondary memory
(B) Mainframe operating device memory
(C) Modulator and Demodulator
(D) All of the above
10. To turn the tables:
(A) To change completely the position of disadvantage
(B) To change the sorry scheme
(C) To opposite
(D) To defeat
11. To keep the ball rolling:
(A) To work instantly
(B) To make the best use of
(C) To keep the conversation going
(D) To earn more and more
12. The pros and cons:
(A) For and Against (B) Fresh and Stale
(C) Foul and Fair (D) Former and Latter
13. The antonym of MAMMOTH is _____?
(A) Big (B) Giant
(C) Small (D) Low
14. Antonym of ELASTIC is _____?
(A) Yielding (B) Rigid
(C) Mold-able (D) Supple
15. Antonym of PACIFIC is _____?
(A) Aggressive (B) Peaceful
(C) Hawkish (D) Discordant
16. Antonym of DWARF is _____?
(A) Giant (B) Tiny
(C) Huge (D) Enormous
17. Antonym of LABOR is _____?
(A) Amuse (B) Surrender
(C) Rest (D) Strive
18. Synonym of DELEGATE is _____?
(A) Representative (B) Officer
(C) Member (D) Servant
19. Synonym of PRECARIOUS is _____?
(A) Safe (B) Brittle
(C) Perilous (D) None of these
20. Synonym of ZEALOT is _____?
(A) Fanatic (B) Apathy
(C) Liberal (D) Impious
21. Synonym of YELL is _____?
(A) Shackle (B) Hitch
(C) Whisper (D) Shout
22. This passport is valid _____ five years.

(A) To (B) For
(C) Of (D) In

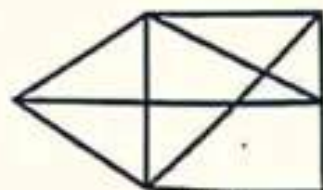
- (A) To (B) For
(C) Of (D) In
23. I assure you _____ my cooperation.
(A) Of (B) In
(C) To (D) For
24. My sister is bad _____ Maths.
(A) In (B) With
(C) At (D) From
25. A dog fell _____ water?
(A) into (B) In
(C) Inside (D) None of these
26. Police said they found thirty bodies _____ the wreckage?
(A) In (B) Between
(C) Among (D) Under
27. She slept _____ the movie.
(A) While (B) During
(C) At (D) None of these
28. To which Prophet the Injeel was revealed by Allah?
(A) Prophet Ibraheem AS
(B) Prophet Dawood AS
(C) Prophet Moosa AS
(D) Prophet Essa AS
29. _____ takes out souls of life bearing creatures.
(A) Hazrat Jibrael AS
(B) Hazrat Mikael AS
(C) Hazrat Israfeel AS
(D) Hazrat Izraeel AS
30. Prophet Muhammad (PBUH) lived in Madina for _____ years.
(A) 8 (B) 9
(C) 10 (D) 11
31. Eid prayer is _____?
(A) Wajib (B) Farz
(C) Sunnat (D) Mustahib
32. Which Surah starts without "Bismillah"
(A) Al-Baqara (B) Al-Nisa
(C) Al-Toba (D) Al-Ikhlās
33. In Surah Kahf, which animal is mentioned along with the Ashaab e Kahf?
(A) Dog (B) Cat
(C) Horse (D) Woodpecker
34. What official name was given to Pakistan in 1956 constitution?
(A) United States of Pakistan
(B) Republic of Pakistan
(C) Islamic Pakistan
(D) Islamic Republic of Pakistan
35. Who elects the President according to 1973 constitution?
(A) National Assembly
(B) Senate
(C) Provincial Assemblies
(D) All of them
36. Which is the national flower of Pakistan?

- (A) Lily (B) Rose
(C) Jasmine (D) Tulip
37. What is the Capital of Afghanistan?
(A) Zagreb (B) Kandahar
(C) Jalalabad (D) Kabul
38. Pound Sterling is the currency of _____?
(A) United Kingdom (B) United States
(C) Germany (D) Canada
39. The world largest Muslim country by area is:
(A) Saudi Arabia (B) Kazakhstan
(C) Pakistan (D) Indonesia
40. Where is the tomb of Mughal Emperor Jahangir?
(A) Sialkot (B) Multan
(C) Lahore (D) Karachi
41. The largest planet is:
(A) Jupiter (B) Mercury
(C) Venus (D) Earth
42. Where is Lal Sohanra National Park located?
(A) Lahore (B) Karachi
(C) Bahawalpur (D) Hyderabad
43. Insert the missing letter: D, K, G, N, —, Q, M, T
(A) K (B) J
(C) P (D) O
44. 36 is to 4 as 9 is to?
(A) 27 (B) 1
(C) 5 (D) 18
45. No dog can sing, but some dogs can talk. If so, then
(A) Some dogs can sing.
(B) All dogs can't talk.
(C) All dogs can't sing
(D) None of the above
46. Food is to hunger as Sleep is to?
(A) Dream (B) Weariness
(C) Night (D) Rest
47. Find the number of triangles in the given figure.



- (A) 18 (B) 20
(C) 24 (D) 27

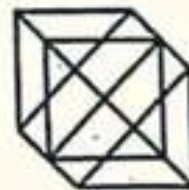
48. Find the number of triangles in the given figure.



- (A) 12 (B) 13
(C) 14 (D) 15

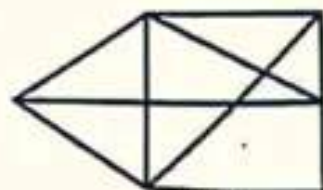
- (A) To (B) For
(C) Of (D) In
23. I assure you _____ my cooperation.
(A) Of (B) In
(C) To (D) For
24. My sister is bad _____ Maths.
(A) In (B) With
(C) At (D) From
25. A dog fell _____ water?
(A) into (B) In
(C) Inside (D) None of these
26. Police said they found thirty bodies _____ the wreckage?
(A) In (B) Between
(C) Among (D) Under
27. She slept _____ the movie.
(A) While (B) During
(C) At (D) None of these
28. To which Prophet the Injeel was revealed by Allah?
(A) Prophet Ibraheem AS
(B) Prophet Dawood AS
(C) Prophet Moosa AS
(D) Prophet Essa AS
29. _____ takes out souls of life bearing creatures.
(A) Hazrat Jibrael AS
(B) Hazrat Mikael AS
(C) Hazrat Israfeel AS
(D) Hazrat Izraeel AS
30. Prophet Muhammad (PBUH) lived in Madina for _____ years.
(A) 8 (B) 9
(C) 10 (D) 11
31. Eid prayer is _____?
(A) Wajib (B) Farz
(C) Sunnat (D) Mustahib
32. Which Surah starts without "Bismillah"
(A) Al-Baqara (B) Al-Nisa
(C) Al-Toba (D) Al-Ikhlās
33. In Surah Kahf, which animal is mentioned along with the Ashaab e Kahf?
(A) Dog (B) Cat
(C) Horse (D) Woodpecker
34. What official name was given to Pakistan in 1956 constitution?
(A) United States of Pakistan
(B) Republic of Pakistan
(C) Islamic Pakistan
(D) Islamic Republic of Pakistan
35. Who elects the President according to 1973 constitution?
(A) National Assembly
(B) Senate
(C) Provincial Assemblies
(D) All of them
36. Which is the national flower of Pakistan?

- (A) Lily (B) Rose
(C) Jasmine (D) Tulip
37. What is the Capital of Afghanistan?
(A) Zagreb (B) Kandahar
(C) Jalalabad (D) Kabul
38. Pound Sterling is the currency of _____?
(A) United Kingdom (B) United States
(C) Germany (D) Canada
39. The world largest Muslim country by area is:
(A) Saudi Arabia (B) Kazakhstan
(C) Pakistan (D) Indonesia
40. Where is the tomb of Mughal Emperor Jahangir?
(A) Sialkot (B) Multan
(C) Lahore (D) Karachi
41. The largest planet is:
(A) Jupiter (B) Mercury
(C) Venus (D) Earth
42. Where is Lal Sohanra National Park located?
(A) Lahore (B) Karachi
(C) Bahawalpur (D) Hyderabad
43. Insert the missing letter: D, K, G, N, —, Q, M, T
(A) K (B) J
(C) P (D) O
44. 36 is to 4 as 9 is to?
(A) 27 (B) 1
(C) 5 (D) 18
45. No dog can sing, but some dogs can talk. If so, then
(A) Some dogs can sing.
(B) All dogs can't talk.
(C) All dogs can't sing
(D) None of the above
46. Food is to hunger as Sleep is to?
(A) Dream (B) Weariness
(C) Night (D) Rest
47. Find the number of triangles in the given figure.



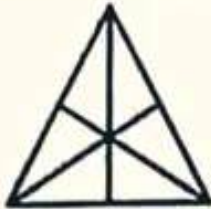
- (A) 18 (B) 20
(C) 24 (D) 27

48. Find the number of triangles in the given figure.



- (A) 12 (B) 13
(C) 14 (D) 15

49. Find the number of triangles in the given figure.



- (A) 16 (B) 13
(C) 9 (D) 7

50. Find the number of triangles in the given figure.



- (A) 5 (B) 6
(C) 8 (D) 10

51. Arrange the words given below in a meaningful sequence.

1. Table 2. Tree 3. Wood 4. Seed 5. Plant

- (A) 1, 2, 3, 4, 5 (B) 1, 3, 2, 4, 5
(C) 4, 5, 2, 3, 1 (D) 4, 5, 3, 2, 1

52. Arrange the words given below in a meaningful sequence.

1. Windows 2. Walls 3. Floor 4. Foundation 5. Roof 6. Room

- (A) 4, 1, 5, 6, 2, 3 (B) 4, 2, 1, 5, 3, 6
(C) 4, 3, 5, 6, 2, 1 (D) 4, 5, 3, 2, 1, 6

53. Introducing a boy, a girl said, "He is the son of the daughter of the father of my uncle." How is the boy related to the girl?

- (A) Brother (B) Nephew
(C) Uncle (D) Son-in-law

54. If A is the brother of B; B is the sister of C; and C is the father of D, how D is related to A?

- (A) Brother (B) Sister
(C) Nephew (D) Cannot be determined

55. To write an empty set we use the symbol?

- (A) 0 (B) \emptyset
(C) < (D) >

56. Set of Natural numbers is:

- (A) $\{1, 2, 3, 4, \dots\}$ (B) $\{0, 1, 2, 3, \dots\}$
(C) $\{2, 4, 6, 8, \dots\}$ (D) \emptyset

57. Which of the following ratio is largest?

- (A) 15:23 (B) 7:15
(C) 17:25 (D) 21:29

58. _____ is 200 more than 546.

- (A) 346 (B) 446
(C) 646 (D) 746

$$546 + 200 = 746$$

59. A shop keeper puts an even number of chocolates in a jar. How many chocolates could he have put in the pot?

- (A) 999 (B) 900
(C) 901 (D) 909

Solution:

900 is even number that is divisible by 2

60. Which one of the following is not a prime number?

- (A) 31 (B) 61
(C) 71 (D) 91

Answer Key

- | | | | | | | | |
|------|-------|-------|-------|-------|-------|-------|-------|
| 1. C | 9. C | 17. C | 25. A | 33. A | 41. A | 49. A | 57. D |
| 2. C | 10. A | 18. A | 26. A | 34. D | 42. C | 50. D | 58. D |
| 3. D | 11. C | 19. D | 27. B | 35. D | 43. B | 51. C | 59. B |
| 4. C | 12. A | 20. A | 28. D | 36. C | 44. B | 52. B | 60. D |
| 5. D | 13. C | 21. D | 29. D | 37. D | 45. C | 53. A | |
| 6. D | 14. B | 22. B | 30. C | 38. A | 46. B | 54. D | |
| 7. C | 15. A | 23. A | 31. A | 39. B | 47. C | 55. B | |
| 8. D | 16. A | 24. C | 32. C | 40. C | 48. D | 56. A | |

GD (BS-11) 2022
Intelligence Bureau Batch 4

1. To be rolling in money:
(A) Very rich
(B) Spending more than his income
(C) Wasting a lot of money
(D) Borrowing money liberally
2. To give a false coloring:

- (A) To conceal the facts
- (B) To be dishonest
- (C) To submit the false report
- (D) To misrepresent

3. Synonym of WANE _____?
(A) Employ (B) Decline

- (C) Rise (D) Revive
4. Synonym of CATASTROPHE is _____?
(A) Built (B) Implement
(C) Destruction (D) Fresh
5. Synonym of ENIGMA is _____?
(A) Question (B) Puzzle
(C) Answer (D) Content
6. Synonym of DISDAIN is _____?
(A) Love (B) Scorn
(C) Accept (D) Luddle
7. Our body has a remarkable resistance _____ diseases.
(A) To (B) With
(C) At (D) In
8. He has no sympathy _____ beggars.
(A) To (B) For
(C) At (D) In
9. He showed great tenacity _____ purpose in bringing the task to completion.
(A) For (B) At
(C) Of (D) In
10. He has no trust _____ his own skill.
(A) On (B) Of
(C) With (D) In
11. His zeal _____ work is known to everybody.
(A) To (B) For
(C) On (D) Of
12. There is no need for you to be sensitive _____ criticism.
(A) For (B) To
(C) With (D) At
13. He was shy _____ fighting with his opponent.
(A) On (B) Of
(C) To (D) With
14. He may be slow _____ understanding.
(A) To (B) With
(C) At (D) For
15. He was true _____ his master.
(A) Of (B) To
(C) With (D) In
16. Change the voice: The boys elected Mohsin captain.
(A) The boys were elected captain by Mohsin
(B) Mohsin is elected captain by the boys.
(C) Mohsin was elected captain by the boys.
(D) Mohsin and the boys elected the captain.
17. Change the voice: Amjad has solved the issue
(A) The issue have been solved by Amjad.
(B) The issue is solved by Amjad.
(C) The issue has been solved by Amjad.
(D) The issue had been solved by Amjad.
18. Convert to indirect: He asked, "Do I have to do it?"
(A) He asked if he had to do that.
(B) He asked that he had to do it.
(C) He asked if he has to do it.
(D) He asked if he had to do it.

19. If 25 men can eat 150 kg of wheat in 30 days then 45 men can eat 450 kg of wheat in how many days?
(A) 13 days (B) 50 days
(C) 15 days (D) 18 days

Solution:
Each men eat = $150/25 = 6$
A man could eat $6/30$ kg in a day
if there are 450 kg
 $450 \times 6/30 \times 45 = 50$ days

20. The multiplication of two irrational numbers is
(A) Irrational
(B) Rational
(C) May be rational or irrational
(D) None of these

Solution:
The product of two irrational numbers is always an irrational number.

21. Complete the series 2,6,18,54,
(A) 108 (B) 148
(C) 162 (D) 216

Solution:
 $6/2 = 3$
 $18/6 = 3$
 $54/18 = 3$
 $X/54 = 3$
 $X = 3 \times 54 = 162$

22. Complete the series 8,6,9,23,87
(A) 108 (B) 226
(C) 324 (D) 429

Solution:
 $8 \times 1 - 2 = 6$
 $6 \times 2 - 3 = 9$
 $9 \times 3 - 4 = 23$
 $23 \times 4 - 5 = 87$
 $87 \times 5 - 6 = 429 \dots$

23. If 6 men take 9 days to complete a work, how many men can complete the work in 3 days?
(A) 2 men (B) 12 men
(C) 9 men (D) 18 men

Solution:
More men need less days
Let X be required men
 $X \times 6 \times 9/3 = 6 \times 3 = 18$ men

24. If 10 workers can make 10 tables in 10 days, then how many days would it take for 5 workers to make 5 tables?
(A) 1 (B) 5
(C) 10 (D) 25

Solution:
10 workers make 10 tables in 10 days. 1 worker makes 1 table in 10 days. Similarly, 5 workers can make 5 tables in 10 days.

25. Find the number of triangles in the given figure.

GD (BS-11) 2022
Intelligence Bureau Batch 4

1. To be rolling in money:
(A) Very rich
(B) Spending more than his income
(C) Wasting a lot of money
(D) Borrowing money liberally
2. To give a false coloring:

- (A) To conceal the facts
- (B) To be dishonest
- (C) To submit the false report
- (D) To misrepresent

3. Synonym of WANE _____?
(A) Employ (B) Decline

- (C) Rise (D) Revive
4. Synonym of CATASTROPHE is _____?
(A) Built (B) Implement
(C) Destruction (D) Fresh
5. Synonym of ENIGMA is _____?
(A) Question (B) Puzzle
(C) Answer (D) Content
6. Synonym of DISDAIN is _____?
(A) Love (B) Scorn
(C) Accept (D) Luddle
7. Our body has a remarkable resistance _____ diseases.
(A) To (B) With
(C) At (D) In
8. He has no sympathy _____ beggars.
(A) To (B) For
(C) At (D) In
9. He showed great tenacity _____ purpose in bringing the task to completion.
(A) For (B) At
(C) Of (D) In
10. He has no trust _____ his own skill.
(A) On (B) Of
(C) With (D) In
11. His zeal _____ work is known to everybody.
(A) To (B) For
(C) On (D) Of
12. There is no need for you to be sensitive _____ criticism.
(A) For (B) To
(C) With (D) At
13. He was shy _____ fighting with his opponent.
(A) On (B) Of
(C) To (D) With
14. He may be slow _____ understanding.
(A) To (B) With
(C) At (D) For
15. He was true _____ his master.
(A) Of (B) To
(C) With (D) In
16. Change the voice: The boys elected Mohsin captain.
(A) The boys were elected captain by Mohsin
(B) Mohsin is elected captain by the boys.
(C) Mohsin was elected captain by the boys.
(D) Mohsin and the boys elected the captain.
17. Change the voice: Amjad has solved the issue
(A) The issue have been solved by Amjad.
(B) The issue is solved by Amjad.
(C) The issue has been solved by Amjad.
(D) The issue had been solved by Amjad.
18. Convert to indirect: He asked, "Do I have to do it?"
(A) He asked if he had to do that.
(B) He asked that he had to do it.
(C) He asked if he has to do it.
(D) He asked if he had to do it.

19. If 25 men can eat 150 kg of wheat in 30 days then 45 men can eat 450 kg of wheat in how many days?
(A) 13 days (B) 50 days
(C) 15 days (D) 18 days

Solution:
Each men eat = $150/25 = 6$
A man could eat $6/30$ kg in a day
if there are 450 kg
 $450 \times 6/30 \times 45 = 50$ days

20. The multiplication of two irrational numbers is
(A) Irrational
(B) Rational
(C) May be rational or irrational
(D) None of these

Solution:
The product of two irrational numbers is always an irrational number.

21. Complete the series 2,6,18,54,
(A) 108 (B) 148
(C) 162 (D) 216

Solution:
 $6/2 = 3$
 $18/6 = 3$
 $54/18 = 3$
 $X/54 = 3$
 $X = 3 \times 54 = 162$

22. Complete the series 8,6,9,23,87
(A) 108 (B) 226
(C) 324 (D) 429

Solution:
 $8 \times 1 - 2 = 6$
 $6 \times 2 - 3 = 9$
 $9 \times 3 - 4 = 23$
 $23 \times 4 - 5 = 87$
 $87 \times 5 - 6 = 429 \dots$

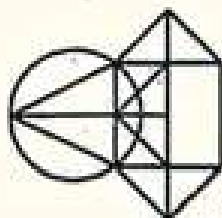
23. If 6 men take 9 days to complete a work, how many men can complete the work in 3 days?
(A) 2 men (B) 12 men
(C) 9 men (D) 18 men

Solution:
More men need less days
Let X be required men
 $X \times 6 \times 9/3 = 6 \times 3 = 18$ men

24. If 10 workers can make 10 tables in 10 days, then how many days would it take for 5 workers to make 5 tables?
(A) 1 (B) 5
(C) 10 (D) 25


Solution:
10 workers make 10 tables in 10 days. 1 worker makes 1 table in 10 days. Similarly, 5 workers can make 5 tables in 10 days.

25. Find the number of triangles in the given figure.



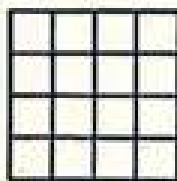
- (A) 10 (B) 12
(C) 14 (D) 16

26. Find the number of triangles in the given figure.



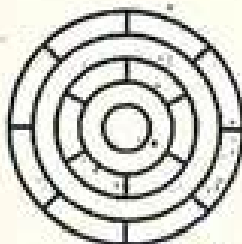
- (A) 36 (B) 40
(C) 44 (D) 48

27. Count the number of squares of equal size in the given figure.



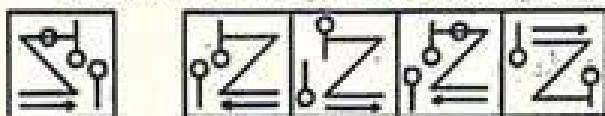
- (A) 32 (B) 30
(C) 29 (D) 28

28. What is the minimum number of different colours required to paint the given figure such that no two adjacent regions have the same colour?



- (A) 03 (B) 04
(C) 05 (D) 06

29. Choose the correct mirror image of the given figure (X) from amongst the four alternatives.

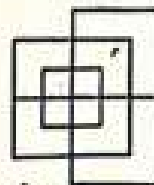


- (X) (1) (2) (3) (4)
(A) 1 (B) 2
(C) 3 (D) 4

30. Rizwan said to Majid "that boy playing with football is younger of the two brothers of the daughter of my father's wife" How is the boy playing football related to Rizwan?
(A) Son (B) Brother
(C) Cousin (D) Brother in law

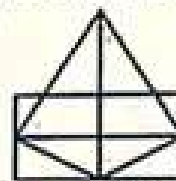
31. Seema who is the sister-in-law of Arshad, is the daughter-in-law of Kiran. Ahmad is the father of Saleem who is the only brother of Arshad. How Kiran is related to Arshad?
(A) Mother-in-law (B) Aunt
(C) Wife (D) None of these (Mother)

32. Find the minimum number of straight lines required to make the given figure.



- (A) 13 (B) 15
(C) 17 (D) 19

33. Find the number of triangles in the given figure.



- (A) 11 (B) 13
(C) 15 (D) 17

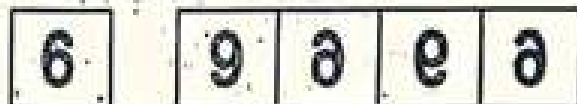
34. Choose the alternative which is closely resembles the mirror image of the given combination.

MALAYALAM

- (1) MALAYALAM (2) MAJAYAJAM
(3) MYTYVYTYVY (4) MAFAYAFAM

- (A) 1 (B) 2
(C) 3 (D) 4

35. Choose the correct mirror image of the given figure (X) from the amongst the four alternatives.



- (X) (1) (2) (3) (4)

- (A) 1 (B) 2
(C) 3 (D) 4

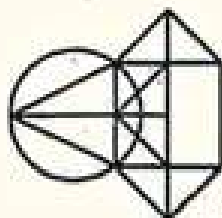
36. If $A + B$ means A is the brother of B; $A - B$ means A is the sister of B and $A \times B$ means A is the father of B. Which of the following means that C is the son of M?
(A) $M - N \times C + F$ (B) $F - C + N \times M$
(C) $N + M - F \times C$ (D) $M \times N - C + F$

37. The Tasbeeh of Subhana Rabbiyal Azeem is recited in?
(A) Sajda (B) Rakuh
(C) Qaada (D) All of the above

38. Salat-e-Istisqa is offered on the occasion of?


- (A) Shortage of rain (B) Solar eclipse
(C) Famine (D) None of these

50. You can access the Picture Styles Gallery by right-clicking the style button as well as from the tab.



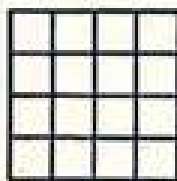
- (A) 10 (B) 12
(C) 14 (D) 16

26. Find the number of triangles in the given figure.



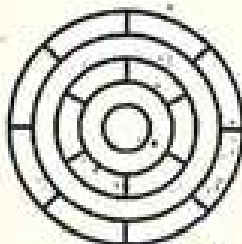
- (A) 36 (B) 40
(C) 44 (D) 48

27. Count the number of squares of equal size in the given figure.



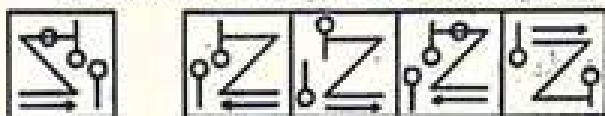
- (A) 32 (B) 30
(C) 29 (D) 28

28. What is the minimum number of different colours required to paint the given figure such that no two adjacent regions have the same colour?



- (A) 03 (B) 04
(C) 05 (D) 06

29. Choose the correct mirror image of the given figure (X) from amongst the four alternatives.

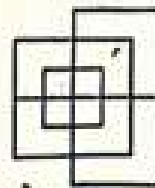


- (X) (1) (2) (3) (4)
(A) 1 (B) 2
(C) 3 (D) 4

30. Rizwan said to Majid "that boy playing with football is younger of the two brothers of the daughter of my father's wife" How is the boy playing football related to Rizwan?
(A) Son (B) Brother
(C) Cousin (D) Brother in law

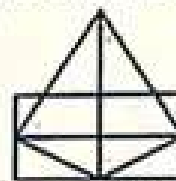
31. Seema who is the sister-in-law of Arshad, is the daughter-in-law of Kiran. Ahmad is the father of Saleem who is the only brother of Arshad. How Kiran is related to Arshad?
(A) Mother-in-law (B) Aunt
(C) Wife (D) None of these (Mother)

32. Find the minimum number of straight lines required to make the given figure.



- (A) 13 (B) 15
(C) 17 (D) 19

33. Find the number of triangles in the given figure.



- (A) 11 (B) 13
(C) 15 (D) 17

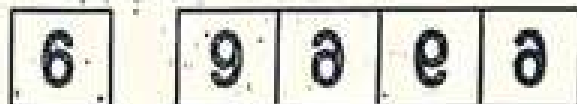
34. Choose the alternative which is closely resembles the mirror image of the given combination.

MALAYALAM

- (1) MALAYALAM (2) MAJAYAJAM
(3) WYTYVYTYVY (4) MAFAYAFAM

- (A) 1 (B) 2
(C) 3 (D) 4

35. Choose the correct mirror image of the given figure (X) from the amongst the four alternatives.



- (X) (1) (2) (3) (4)

- (A) 1 (B) 2
(C) 3 (D) 4

36. If $A + B$ means A is the brother of B; $A - B$ means A is the sister of B and $A \times B$ means A is the father of B. Which of the following means that C is the son of M?

- (A) $M - N \times C + F$ (B) $F - C + N \times M$
(C) $N + M - F \times C$ (D) $M \times N - C + F$

37. The Tasbeeh of Subhana Rabbiyal Azeem is recited in?

- (A) Sajda (B) Rakuh
(C) Qaada (D) All of the above

38. Salat-e-Istisqa is offered on the occasion of?

- (A) Shortage of rain (B) Solar eclipse
(C) Famine (D) None of these

50. You can access the Picture Styles Gallery by right-clicking the style button as well as from the tab.

- (A) Shortage of rain (B) Solar eclipse
(C) Famine (D) None of these
39. Salat-e-Istakhara is performed for?
(A) Rain (B) Fear
(C) Haja'at
(D) None of these (to seek Divine guidance)
40. Name the Nafli Salat which can be offered after sunrise till one fourth of the day?
(A) Chasht (B) Ishraq
(C) Salat Tasbeeh (D) Tahajjud
41. The act of shortening one's prayer while on journey is called:
(A) Wajib (B) Khusar
(C) Qasr (D) None of these
42. The fight of Badr occurred in:
(A) 1 Hijri (B) 2 Hijri
(C) 10 Hijri (D) Hyderabad
43. Lahore (Pakistan) Resolution was passed by All India Muslim League in _____
(A) 1942 (B) 1940
(C) 1930 (D) 1935
44. First Prime Minister of Pakistan was:
(A) Liaqat Ali Khan (B) Quaid-e-Azam
(C) Ch. Rehmat Ali (D) Sir Agha Khan
45. First capital of Pakistan was:
(A) Faisalabad (B) Lahore
(C) Karachi (D) Dhaka
46. What feature provides graphical illustrations and diagrams that you can add to a document?
(A) SmartArt (B) Shapes
(C) Online Pictures (D) Screenshot
47. What tab becomes available once WordArt is added to a document?
(A) Drawing Tools/Design
(B) SmartArt/Format
(C) Drawing Tools/Format
(D) SmartArt/Design
48. What collection of media files are available at Office.com?
(A) SmartArt (B) Clip Art
(C) Shapes (D) Themes
49. On what tab is the Online Picture option located?
(A) File (B) Home
(C) Design (D) Insert
50. You can access the Picture Styles Gallery by right-clicking the style button as well as from the _____ tab.
(A) Home (B) Design
(C) Insert (D) Format
51. In order to adjust an individual item in a clip art image, right-click on the image, select _____ and select the area to adjust.
(A) Style (B) Crop
(C) Format Shape (D) Edit Picture
52. In order to modify the color of a clip art image, what group do you use?
(A) WordArt Styles
(B) Shape Styles
(C) Document Formatting
(D) Styles
53. When you are going to share a document by email, doing which of the following to the image reduce the resolution and file size?
(A) resetting (B) resizing
(C) compressing (D) formatting
54. Spelling & Grammar checking can be found on which tab?
(A) Home (B) Insert
(C) Reference (D) Review
55. What is the capital city of France?
(A) Paris (B) Zurich
(C) Prague (D) Milan
56. How many cards are there in a playing deck?
(A) 36 (B) 52
(C) 54 (D) 42
57. How many days are there in a leap year?
(A) 365 (B) 367
(C) 366 (D) 364
58. Which organ performs blood purification in the human body?
(A) Heart (B) Lung
(C) Kidney (D) Brain
59. What is the name of the acid found in the lemons?
(A) Formic (B) Citric
(C) Acidic (D) Uric
60. What are the products of anaerobic respiration in yeast?
(A) Carbon dioxide (B) Alcohol
(C) Oxygen (D) Both A and B

Answer Key

- | | | | | | | | |
|------|-------|-------|-------|-------|-------|-------|-------|
| 1. A | 9. C | 17. C | 25. C | 33. C | 41. C | 49. D | 57. C |
| 2. D | 10. D | 18. A | 26. D | 34. B | 42. B | 50. D | 58. C |
| 3. B | 11. B | 19. B | 27. B | 35. B | 43. B | 51. D | 59. B |
| 4. C | 12. B | 20. A | 28. A | 36. D | 44. A | 52. B | 60. D |
| 5. B | 13. B | 21. C | 29. C | 37. B | 45. C | 53. C | |
| 6. B | 14. C | 22. D | 30. B | 38. A | 46. A | 54. D | |
| 7. A | 15. B | 23. D | 31. D | 39. D | 47. C | 55. A | |
| 8. B | 16. C | 24. C | 32. A | 40. A | 48. B | 56. B | |

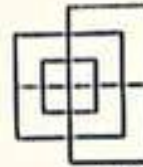
- (A) Shortage of rain (B) Solar eclipse
(C) Famine (D) None of these
39. Salat-e-Istakhara is performed for?
(A) Rain (B) Fear
(C) Haja'at
(D) None of these (to seek Divine guidance)
40. Name the Nafli Salat which can be offered after sunrise till one fourth of the day?
(A) Chasht (B) Ishraq
(C) Salat Tasbeeh (D) Tahajjud
41. The act of shortening one's prayer while on journey is called:
(A) Wajib (B) Khusar
(C) Qasr (D) None of these
42. The fight of Badr occurred in:
(A) 1 Hijri (B) 2 Hijri
(C) 10 Hijri (D) Hyderabad
43. Lahore (Pakistan) Resolution was passed by All India Muslim League in _____
(A) 1942 (B) 1940
(C) 1930 (D) 1935
44. First Prime Minister of Pakistan was:
(A) Liaqat Ali Khan (B) Quaid-e-Azam
(C) Ch. Rehmat Ali (D) Sir Agha Khan
45. First capital of Pakistan was:
(A) Faisalabad (B) Lahore
(C) Karachi (D) Dhaka
46. What feature provides graphical illustrations and diagrams that you can add to a document?
(A) SmartArt (B) Shapes
(C) Online Pictures (D) Screenshot
47. What tab becomes available once WordArt is added to a document?
(A) Drawing Tools/Design
(B) SmartArt/Format
(C) Drawing Tools/Format
(D) SmartArt/Design
48. What collection of media files are available at Office.com?
(A) SmartArt (B) Clip Art
(C) Shapes (D) Themes
49. On what tab is the Online Picture option located?
(A) File (B) Home
(C) Design (D) Insert
50. You can access the Picture Styles Gallery by right-clicking the style button as well as from the _____ tab.
(A) Home (B) Design
(C) Insert (D) Format
51. In order to adjust an individual item in a clip art image, right-click on the image, select _____ and select the area to adjust.
(A) Style (B) Crop
(C) Format Shape (D) Edit Picture
52. In order to modify the color of a clip art image, what group do you use?
(A) WordArt Styles
(B) Shape Styles
(C) Document Formatting
(D) Styles
53. When you are going to share a document by email, doing which of the following to the image reduce the resolution and file size?
(A) resetting (B) resizing
(C) compressing (D) formatting
54. Spelling & Grammar checking can be found on which tab?
(A) Home (B) Insert
(C) Reference (D) Review
55. What is the capital city of France?
(A) Paris (B) Zurich
(C) Prague (D) Milan
56. How many cards are there in a playing deck?
(A) 36 (B) 52
(C) 54 (D) 42
57. How many days are there in a leap year?
(A) 365 (B) 367
(C) 366 (D) 364
58. Which organ performs blood purification in the human body?
(A) Heart (B) Lung
(C) Kidney (D) Brain
59. What is the name of the acid found in the lemons?
(A) Formic (B) Citric
(C) Acidic (D) Uric
60. What are the products of anaerobic respiration in yeast?
(A) Carbon dioxide (B) Alcohol
(C) Oxygen (D) Both A and B

Answer Key

- | | | | | | | | |
|------|-------|-------|-------|-------|-------|-------|-------|
| 1. A | 9. C | 17. C | 25. C | 33. C | 41. C | 49. D | 57. C |
| 2. D | 10. D | 18. A | 26. D | 34. B | 42. B | 50. D | 58. C |
| 3. B | 11. B | 19. B | 27. B | 35. B | 43. B | 51. D | 59. B |
| 4. C | 12. B | 20. A | 28. A | 36. D | 44. A | 52. B | 60. D |
| 5. B | 13. B | 21. C | 29. C | 37. B | 45. C | 53. C | |
| 6. B | 14. C | 22. D | 30. B | 38. A | 46. A | 54. D | |
| 7. A | 15. B | 23. D | 31. D | 39. D | 47. C | 55. A | |
| 8. B | 16. C | 24. C | 32. A | 40. A | 48. B | 56. B | |

GD (BS-11) 2022 Intelligence Bureau Batch 2

- What is the most popular system of shorthand writing?
(A) Sloan Duployan System
(B) Pitman's Shorthand
(C) John Robert Gregg's System
(D) Morse Code
 - What should be the length of a stroke?
(A) Half of an inch (B) $1/3^{\text{rd}}$ of an inch
(C) $1/4^{\text{th}}$ of an inch (D) $1/6^{\text{th}}$ of an inch
 - Which strokes are never written upward?
(A) Light strokes (B) Thick strokes
(C) CH (D) Ar
 - What is an intervening vowel?
(A) Vowel occurring before a stroke
(B) Vowel occurring at the end of a stroke
(C) Vowel occurring between any two strokes
(D) Vowel occurring between two curved strokes
 - Where is a third-place intervening written?
(A) Before the second stroke at the end
(B) After the first stroke at the end
(C) After the second stroke at the end
(D) After the first stroke at the beginning
 - The symbol "*" is used for:
(A) Special (B) Important
(C) Notable (when added to a word or phrase)
(D) All of the above
 - The term "19thC or 19C" is used for:
(A) 19th Century (B) Any Century
(C) Both of the above (D) None of the above
 - Which currency represents this symbol (£)?
(A) American Dollar (B) Pound Sterling
(C) Singapore Dollar (D) Chinese Currency
 - What is the roman letter for 50?
(A) XXXXX (B) XXXXL
(C) CX (D) L
- Solution:**
- | Natural numbers | Corresponding roman no |
|-----------------|------------------------|
| 1 | I |
| 5 | V |
| 10 | X |
| 50 | L |
| 100 | C |
| 500 | D |
| 1000 | M |
- So, Roman letter for 50 is L.
- Find the minimum number of straight lines required to make the given figure.



- (A) 13 (B) 15
(C) 17 (D) 19

11. Find the number of triangles in the given figure.



- (A) 11 (B) 13
(C) 15 (D) 17

12. Choose the alternative which is closely resembles the mirror image of the given combination.

MALAYALAM
(1) MALAYALAM (2) MAJAYAJAM
(3) WWTYAVYVW (4) MAFAYAFAM

- (A) 1 (B) 2
(C) 3 (D) 4

13. Choose the correct mirror image of the given figure (X) from the amongst the four alternatives.



- (X) (1) (2) (3) (4)

- (A) 1 (B) 2
(C) 3 (D) 4

Option D is correct.

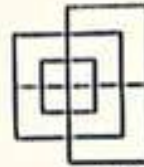
14. If A + B means A is the brother of B; A - B means A is the sister of B and A x B means A is the father of B. Which of the following means that C is the son of M?
(A) M - N x C + F (B) F - C + N x M
(C) N + M - F x C (D) M x N - C + F
15. Introducing a boy, a girl said, "He is the son of the daughter of the father of my uncle." How is the boy related to the girl?
(A) Brother (B) Nephew
(C) Uncle (D) Son in Law

Solution:

The father of the girl's uncle is the grandfather of

GD (BS-11) 2022 Intelligence Bureau Batch 2

- What is the most popular system of shorthand writing?
(A) Sloan Duployan System
(B) Pitman's Shorthand
(C) John Robert Gregg's System
(D) Morse Code
 - What should be the length of a stroke?
(A) Half of an inch (B) $1/3^{\text{rd}}$ of an inch
(C) $1/4^{\text{th}}$ of an inch (D) $1/6^{\text{th}}$ of an inch
 - Which strokes are never written upward?
(A) Light strokes (B) Thick strokes
(C) CH (D) Ar
 - What is an intervening vowel?
(A) Vowel occurring before a stroke
(B) Vowel occurring at the end of a stroke
(C) Vowel occurring between any two strokes
(D) Vowel occurring between two curved strokes
 - Where is a third-place intervening written?
(A) Before the second stroke at the end
(B) After the first stroke at the end
(C) After the second stroke at the end
(D) After the first stroke at the beginning
 - The symbol "*" is used for:
(A) Special (B) Important
(C) Notable (when added to a word or phrase)
(D) All of the above
 - The term "19thC or 19C" is used for:
(A) 19th Century (B) Any Century
(C) Both of the above (D) None of the above
 - Which currency represents this symbol (£)?
(A) American Dollar (B) Pound Sterling
(C) Singapore Dollar (D) Chinese Currency
 - What is the roman letter for 50?
(A) XXXXX (B) XXXXL
(C) CX (D) L
- Solution:**
- | Natural numbers | Corresponding roman no |
|-----------------|------------------------|
| 1 | I |
| 5 | V |
| 10 | X |
| 50 | L |
| 100 | C |
| 500 | D |
| 1000 | M |
- So, Roman letter for 50 is L.
- Find the minimum number of straight lines required to make the given figure.



- (A) 13 (B) 15
(C) 17 (D) 19

11. Find the number of triangles in the given figure.



- (A) 11 (B) 13
(C) 15 (D) 17

12. Choose the alternative which is closely resembles the mirror image of the given combination.

MALAYALAM
(1) MALAYALAM (2) MAJAYAJAM
(3) WWTYAVYVW (4) MAFAYAFAM

- (A) 1 (B) 2
(C) 3 (D) 4

13. Choose the correct mirror image of the given figure (X) from the amongst the four alternatives.



- (X) (1) (2) (3) (4)

- (A) 1 (B) 2
(C) 3 (D) 4

Option D is correct.

14. If A + B means A is the brother of B; A - B means A is the sister of B and A x B means A is the father of B. Which of the following means that C is the son of M?
(A) M - N x C + F (B) F - C + N x M
(C) N + M - F x C (D) M x N - C + F
15. Introducing a boy, a girl said, "He is the son of the daughter of the father of my uncle." How is the boy related to the girl?
(A) Brother (B) Nephew
(C) Uncle (D) Son in Law

Solution:

The father of the girl's uncle is the grandfather of

the girl and daughter of the grandfather is sister of her father.

So, daughter of the grandfather is her aunt.

Aunt's son is brother of the girl.

Hence, option A is correct.

16. Pointing a photograph X said to his friend Y, "She is the only daughter of the father of my mother." How X is related to the person of photograph?

(A) Daughter (B) Son
(C) Nephew (D) None of these

Solution:

X said to his friend Y, "She is the only daughter of the father of my mother."

'The only daughter of the father of X's mother' means the mother of X.

Hence, X is the child of the lady in the photograph. He is the son.

Hence, the answer is son. So option B is correct.

17. If $A + B$ means A is the brother of B; $A \times B$ means A is the son of B; and $A \% B$ means B is the daughter of A then which of the following means M is the maternal uncle of N?

(A) $M + O \times N$ (B) $M / O \times N + P$
(C) $M + O / N$ (D) None of these

18. If D is the brother of B, how B is related to C? To answer this question which of the statements is/are necessary?

A. The son of D is the grandson of C.

B. B is the sister of D.

(A) Only 1
(B) Only 2
(C) Either 1 or 2
(D) 1 and 2 both are required

Solution:

Given: D is the brother of B.

From statement 1, we can detect that D is son of C (son of D is the grandson of C).

From statement 2, we can detect that B is 'Female' (sister of D).

Therefore, B is the daughter of C.

So, option D is correct.

19. Eiffel Tower is located in which country?

(A) Norway (B) France
(C) Belgium (D) India

20. Famous book; Al-Qanun was written by which Muslim scientist?

(A) Jabar bin Hayyan
(B) Zakariya Al-Razi
(C) Bu Ali Sina
(D) Abdul Qasim Majreedi

21. What is the world's largest living mammal?

(A) Elephant (B) Blue Whale
(C) Shark (D) Giraffe

22. What is the currency of Turkey?

(A) Lira (B) Penny
(C) Euro (D) Dollar

23. Manchhar lake is situated in District:

(A) Swat (B) Dadu
(C) Muzaffarabad (D) Gilgit

24. 8th March is observed internationally as?

(A) Women's Day (B) Father's Day
(C) World Health Day (D) Human Rights Day

25. Terbeli Dam is located in _____ district.

(A) Hafizabad (B) Jhelum
(C) Mirpur (D) Swabi

26. The National anthem of Pakistan is written by:

(A) Zafar Ali Khan (B) Allama Iqbal
(C) Hafiz Jalandhri (D) Faiz Ahmad Faiz

27. Who founded Aligarh Muslim School?

(A) Sir Sayyid (B) Quaid-e-Azam
(C) Allama Iqbal (D) Liaquat Ali Khan

28. Prophet (PBUH) recited _____ at the conquest of Makkah.

(A) Surah Al-Falah (B) Surah Al-Kausar
(C) Surah Al-Anfal (D) Surah Al-Ankaboot

29. _____ Muslims fought in the Ghazwa-e-Badr?

(A) 313 (B) 314
(C) 315 (D) 318

30. In Holy Quran _____ Surahs are named after the names of Prophets.

(A) 5 (B) 6
(C) 7 (D) 8

31. Choose the word that is spelled correctly?

(A) Apprenticeship (B) Aprenticeship
(C) Apprentiseship (D) Apperenticeship

32. Choose the word that is spelled correctly?

(A) Brigadier (B) Brigidier
(C) Bregadeir (D) Bragedier

33. Choose the word that is spelled correctly?

(A) Magistrate (B) Magisterate
(C) Magisturate (D) Maggistrate

34. Choose the word that is spelled correctly?

(A) Parliamentarian (B) Parfementarian
(C) Parfementarian (D) Parliamentarian

35. Correct to indirect: She said "Stop staring at me."

(A) She told him to stop staring at him
(B) She told him to stop staring at me
(C) She told him to stop staring at her
(D) She told him to stopped staring at her

36. Convert to indirect form: She asked him "Are you crazy?"

(A) She asked him if she was crazy
(B) She asked him if he was crazy
(C) She asked him if he is crazy
(D) She asked him that if he was crazy

37. Convert to indirect form: she said, "Go upstairs?"

(A) She told me to go upstairs
(B) She said me to upstairs
(C) She told me that go upstairs
(D) She told me to went upstairs

38. Change into Passive Voice: The dealer has

the girl and daughter of the grandfather is sister of her father.

So, daughter of the grandfather is her aunt.
Aunt's son is brother of the girl.

Hence, option A is correct.

16. Pointing a photograph X said to his friend Y, "She is the only daughter of the father of my mother." How X is related to the person of photograph?
(A) Daughter (B) Son
(C) Nephew (D) None of these

Solution:

X said to his friend Y, "She is the only daughter of the father of my mother."

'The only daughter of the father of X's mother' means the mother of X.

Hence, X is the child of the lady in the photograph. He is the son.

Hence, the answer is son. So option B is correct.

17. If $A + B$ means A is the brother of B; $A \times B$ means A is the son of B; and $A \% B$ means B is the daughter of A then which of the following means M is the maternal uncle of N?
(A) $M + O \times N$ (B) $M / O \times N + P$
(C) $M + O / N$ (D) None of these

18. If D is the brother of B, how B is related to C?
To answer this question which of the statements is/are necessary?
A. The son of D is the grandson of C.
B. B is the sister of D.
(A) Only 1
(B) Only 2
(C) Either 1 or 2
(D) 1 and 2 both are required

Solution:

Given: D is the brother of B.

From statement 1, we can detect that D is son of C (son of D is the grandson of C).

From statement 2, we can detect that B is 'Female' (sister of D).

Therefore, B is the daughter of C.

So, option D is correct.

19. Eiffel Tower is located in which country?
(A) Norway (B) France
(C) Belgium (D) India
20. Famous book; Al-Qanun was written by which Muslim scientist?
(A) Jabar bin Hayyan
(B) Zakariya Al-Razi
(C) Bu Ali Sina
(D) Abdul Qasim Majreedi
21. What is the world's largest living mammal?
(A) Elephant (B) Blue Whale
(C) Shark (D) Giraffe
22. What is the currency of Turkey?
(A) Lira (B) Penny
(C) Euro (D) Dollar
23. Manchhar lake is situated in District:

- (A) Swat (B) Dadu
(C) Muzaffarabad (D) Gilgit

24. 8th March is observed internationally as?
(A) Women's Day (B) Father's Day
(C) World Health Day (D) Human Rights Day
25. Terbeli Dam is located in _____ district.
(A) Hafizabad (B) Jhelum
(C) Mirpur (D) Swabi
26. The National anthem of Pakistan is written by:
(A) Zafar Ali Khan (B) Allama Iqbal
(C) Hafiz Jalandhri (D) Faiz Ahmad Faiz
27. Who founded Aligarh Muslim School?
(A) Sir Sayyid (B) Quid-e-Azam
(C) Allama Iqbal (D) Liaqat Ali Khan
28. Prophet (PBUH) recited _____ at the conquest of Makkah.
(A) Surah Al-Falah (B) Surah Al-Kausar
(C) Surah Al-Anfal (D) Surah Al-Ankaboot
29. _____ Muslims fought in the Ghazwa-e-Badr?
(A) 313 (B) 314
(C) 315 (D) 318
30. In Holy Quran _____ Surahs are named after the names of Prophets.
(A) 5 (B) 6
(C) 7 (D) 8
31. Choose the word that is spelled correctly?
(A) Apprenticeship (B) Aprenticeship
(C) Apprentiseship (D) Apperenticeship
32. Choose the word that is spelled correctly?
(A) Brigadier (B) Brigidier
(C) Bregadeir (D) Bragedier
33. Choose the word that is spelled correctly?
(A) Magistrate (B) Magisterate
(C) Magisturate (D) Maggable
34. Choose the word that is spelled correctly?
(A) Parliamentarian (B) Parfementarian
(C) Parfementarian (D) Parliamentarian
35. Correct to indirect: She said "Stop staring at me."
(A) She told him to stop staring at him
(B) She told him to stop staring at me
(C) She told him to stop staring at her
(D) She told him to stopped staring at her
36. Convert to indirect form: She asked him "Are you crazy?"
(A) She asked him if she was crazy
(B) She asked him if he was crazy
(C) She asked him if he is crazy
(D) She asked him that if he was crazy
37. Convert to indirect form: she said, "Go upstairs?"
(A) She told me to go upstairs
(B) She said me to upstairs
(C) She told me that go upstairs
(D) She told me to went upstairs
38. Change into Passive Voice: The dealer has

- sold the car?
 (A) The car have been sold by the dealer
 (B) The selling has been done by the dealer of the car
 (C) The car has been sold by the dealer
 (D) None of them
39. Change the Passive Voice of the following sentence: Our lives are being spent in expectation?
 (A) We used to spend our lives in expectation
 (B) We are spending our lives in expectation
 (C) We spent our lives in expectation
 (D) We spend our lives in expectations
40. Loading of operating system (OS) into computer memory is called:
 (A) Initializing (B) Booting
 (C) Processing (D) Running
41. Which one is an application software?
 (A) Windows (B) Linux
 (C) MS-Excel (D) DOS
42. What are the two kinds of main memory in computer?
 (A) Secondary and Primary
 (B) RAM and ROM
 (C) Random and Sequential
 (D) Cache and Buffers
43. Integrated Circuits (ICs) are related to which generation of computers?
 (A) First Generation
 (B) Second Generation
 (C) Third Generation
 (D) Fourth Generation
44. Which of the following is not a valid data type in MS-Excel?
 (A) Number (B) Character
 (C) Label (D) Date/Time
45. Virtual memory is typically located on
 (A) RAM (B) CPU
 (C) Flash Card (D) Hard Drive
46. Which of the following is not the part of standard office suite?
 (A) Word Processor (B) Database
 (C) Image Editor (D) File manager
47. Which of the following is not available on the Ruler of MS Word screen?
 (A) Tab stop box (B) Left Indent
 (C) Right Indent (D) Center Indent
48. What is gutter margin?
 (A) Margin that is added to the left margin when printing
 (B) Margin that is added to right margin when printing
 (C) Margin that is added to the binding side of page when printing
 (D) Margin that is added to the outside of the page when printing
49. What is the default file extension for all Word documents?
 (A) .txt (B) .word
 (C) .docs (D) .docx
50. In Word, the mailing list is known as the _____.
 (A) Data Sheet (B) Source
 (C) Data Source (D) Sheet
51. Which of the following enables you to make multiple changes in a document as once?
 (A) Find Command
 (B) Replace Command
 (C) Drag and Drop
 (D) Copy Command
52. When you save a file as a Web page, Word converts the contents of the document into _____.
 (A) Java (B) Perl
 (C) HTML (D) Unix
53. Hyperlinks can be
 (A) Text (B) Drawing objects
 (C) Pictures (D) All of above
54. How are data organized in a spreadsheet?
 (A) Lines and Spaces
 (B) Layers and Planes
 (C) Rows and Columns
 (D) Height and Width
55. Which is not the function of the operating system?
 (A) Memory management
 (B) Disk management
 (C) Virus Protection
 (D) Application management
56. Two or more computers connected to each other for sharing information form a _____.
 (A) Pipeline (B) Router
 (C) Server (D) Network
57. What is the full form of USB as used in computer related activities?
 (A) Universal Serial Bus
 (B) Ultra Serial Block
 (C) United Service Block
 (D) Universal Security Block
58. The language that the computer can understand and execute is called _____.
 (A) System program
 (B) Application software
 (C) Machine language
 (D) All of the above
59. The Device which converts instructions into the binary form that is understood by the computer and supply to the computer is known as
 (A) Memory (B) Output
 (C) Automatic (D) Input
60. How many Bytes in a Megabyte (MB)?
 (A) 1,000,000 (B) 1,024,000
 (C) 1,048,576 (D) 1,000,024

Answer Key

1. B	9. D	17. D	25. D	33. A	41. C	49. D	57. A
2. A	10. A	18. D	26. C	34. A	42. B	50. C	58. C
3. B	11. C	19. B	27. A	35. C	43. C	51. B	59. D
4. C	12. B	20. C	28. A	36. B	44. B	52. C	60. B
5. A	13. D	21. B	29. A	37. A	45. D	53. D	
6. D	14. D	22. A	30. B	38. C	46. B	54. C	
7. A	15. A	23. B	31. A	39. B	47. D	55. C	
8. B	16. B	24. A	32. A	40. B	48. C	56. D	



- sold the car?
 (A) The car have been sold by the dealer
 (B) The selling has been done by the dealer of the car
 (C) The car has been sold by the dealer
 (D) None of them
39. Change the Passive Voice of the following sentence: Our lives are being spent in expectation?
 (A) We used to spend our lives in expectation
 (B) We are spending our lives in expectation
 (C) We spent our lives in expectation
 (D) We spend our lives in expectations
40. Loading of operating system (OS) into computer memory is called:
 (A) Initializing (B) Booting
 (C) Processing (D) Running
41. Which one is an application software?
 (A) Windows (B) Linux
 (C) MS-Excel (D) DOS
42. What are the two kinds of main memory in computer?
 (A) Secondary and Primary
 (B) RAM and ROM
 (C) Random and Sequential
 (D) Cache and Buffers
43. Integrated Circuits (ICs) are related to which generation of computers?
 (A) First Generation
 (B) Second Generation
 (C) Third Generation
 (D) Fourth Generation
44. Which of the following is not a valid data type in MS-Excel?
 (A) Number (B) Character
 (C) Label (D) Date/Time
45. Virtual memory is typically located on
 (A) RAM (B) CPU
 (C) Flash Card (D) Hard Drive
46. Which of the following is not the part of standard office suite?
 (A) Word Processor (B) Database
 (C) Image Editor (D) File manager
47. Which of the following is not available on the Ruler of MS Word screen?
 (A) Tab stop box (B) Left Indent
 (C) Right Indent (D) Center Indent
48. What is gutter margin?
 (A) Margin that is added to the left margin when printing
 (B) Margin that is added to right margin when printing
 (C) Margin that is added to the binding side of page when printing
 (D) Margin that is added to the outside of the page when printing
49. What is the default file extension for all Word documents?
 (A) .txt (B) .word
 (C) .docs (D) .docx
50. In Word, the mailing list is known as the _____.
 (A) Data Sheet (B) Source
 (C) Data Source (D) Sheet
51. Which of the following enables you to make multiple changes in a document as once?
 (A) Find Command
 (B) Replace Command
 (C) Drag and Drop
 (D) Copy Command
52. When you save a file as a Web page, Word converts the contents of the document into _____.
 (A) Java (B) Perl
 (C) HTML (D) Unix
53. Hyperlinks can be
 (A) Text (B) Drawing objects
 (C) Pictures (D) All of above
54. How are data organized in a spreadsheet?
 (A) Lines and Spaces
 (B) Layers and Planes
 (C) Rows and Columns
 (D) Height and Width
55. Which is not the function of the operating system?
 (A) Memory management
 (B) Disk management
 (C) Virus Protection
 (D) Application management
56. Two or more computers connected to each other for sharing information form a _____.
 (A) Pipeline (B) Router
 (C) Server (D) Network
57. What is the full form of USB as used in computer related activities?
 (A) Universal Serial Bus
 (B) Ultra Serial Block
 (C) United Service Block
 (D) Universal Security Block
58. The language that the computer can understand and execute is called _____.
 (A) System program
 (B) Application software
 (C) Machine language
 (D) All of the above
59. The Device which converts instructions into the binary form that is understood by the computer and supply to the computer is known as
 (A) Memory (B) Output
 (C) Automatic (D) Input
60. How many Bytes in a Megabyte (MB)?
 (A) 1,000,000 (B) 1,024,000
 (C) 1,048,576 (D) 1,000,024

Answer Key

- | | | | | | | | |
|------|-------|-------|-------|-------|-------|-------|-------|
| 1. B | 9. D | 17. D | 25. D | 33. A | 41. C | 49. D | 57. A |
| 2. A | 10. A | 18. D | 26. C | 34. A | 42. B | 50. C | 58. C |
| 3. B | 11. C | 19. B | 27. A | 35. C | 43. C | 51. B | 59. D |
| 4. C | 12. B | 20. C | 28. A | 36. B | 44. B | 52. C | 60. B |
| 5. A | 13. D | 21. B | 29. A | 37. A | 45. D | 53. D | |
| 6. D | 14. D | 22. A | 30. B | 38. C | 46. B | 54. C | |
| 7. A | 15. A | 23. B | 31. A | 39. B | 47. D | 55. C | |
| 8. B | 16. B | 24. A | 32. A | 40. B | 48. C | 56. D | |

